



Name: \_\_\_\_\_

# Solving Using Different Strategies



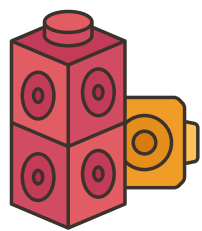
Using Our Fingers

$$8 - 2 =$$



Using Counters

$$5 + 1 =$$


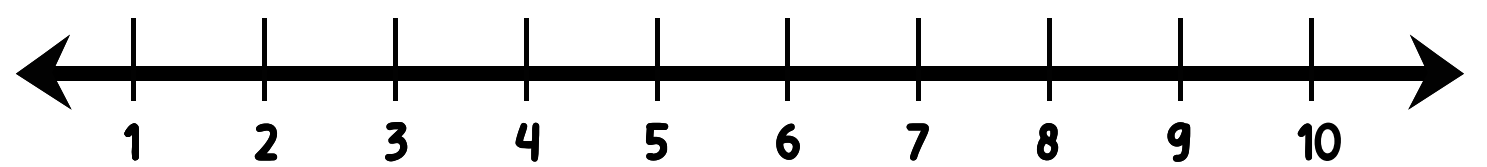


Using Cubes

$$6 - 3 =$$

Using Number Lines

$$4 + 4 =$$



Using Drawings

$$2 - 2 =$$

Solve however you'd like!

$$4 - 1 =$$